

Year 7

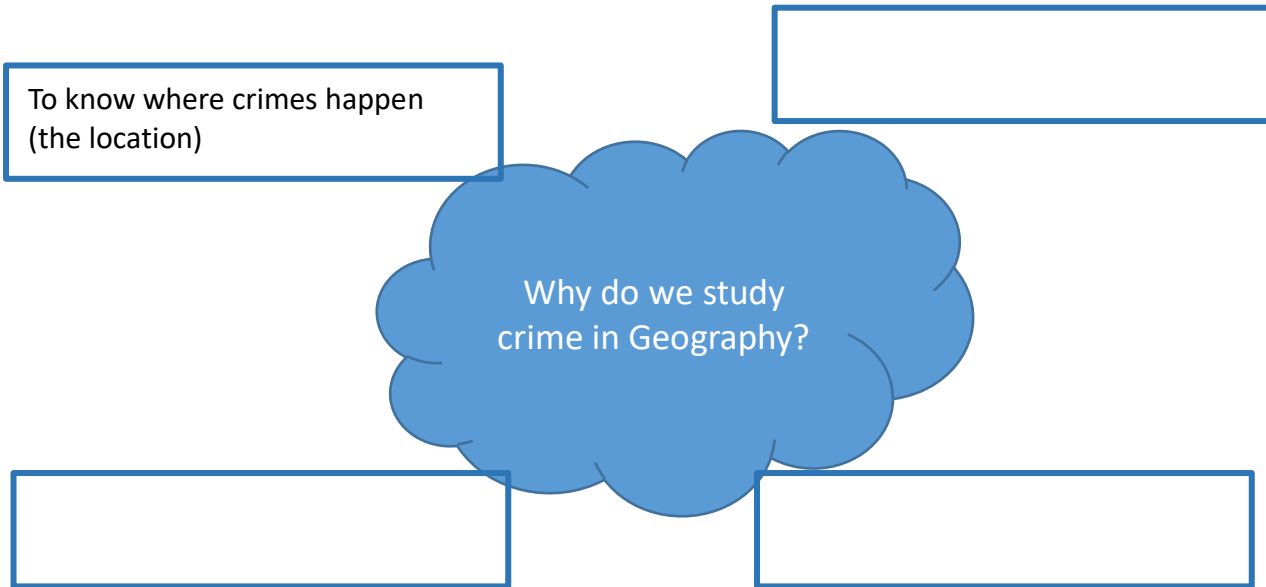
Name:

Teacher:

Title: What is Crime?

Task 1: Fill the boxes around the mind map to answer the question – Why do we study crime in Geography?

The first one has been done for you.




What types of crime are there?


Task 2: Using the photos to help you, what types of crime are there?




1.



2.



3.



Challenge 1: What other types of crimes can you think of that aren't shown in the pictures?

1.

2.

Task 3: You are going to investigate what crime has happened in your area



Use the information on the website to answer the following questions in the text box.

1. What is the most common reported crime during November 2020 for BD10 9AQ?

2. Which month has the highest crime rate in BD10 9AQ?

3. Which month in 2020 had the lowest crime rate in BD10 9AQ? Explain a possible reason why? (*Hint: COVID-19*)